


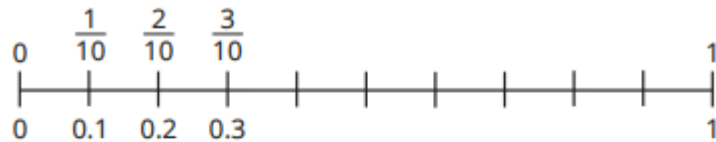
Year 4 Homework

Set 17.04.2026

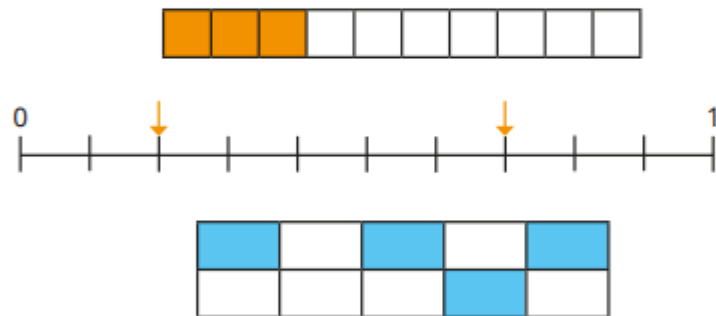
<u>Subject</u>	<u>Task</u>	<u>Feedback</u>	<u>Due in w/c</u>
<u>Spellings</u>	<p>To ensure progress is made against the Year 3 and 4 spelling lists we are going to set a list of 76 words each week off the Year 3/4 statutory word list. Please can you work with your child to check they can read and spell the following words:</p> <p>Collision Extension Explosion Comprehension Evasion</p> <div style="display: flex; justify-content: space-around; align-items: center;"> <div style="border: 1px solid black; padding: 5px; text-align: center;"> <p>Weigh Straight Break Eight</p> </div> <div style="border: 1px solid black; padding: 5px; text-align: center;"> <p>Where youth Bruise fruit</p> </div> </div>	Marked in class and written in homework books	22.04.2026
<u>Maths</u>	<p>Fractions as tenths My Maths (Login details are in homework books) Complete sessions on 'TT Rock Stars'. Help your class be the best in the year group. It takes everyone to complete 15minutes a week!</p>	Marked in class Time given to practise multiplication tables	22.04.2026
<u>Reading</u>	Regular reading at home is essential! Record your reading in your diary All children should have a book suitable for their level of reading. Please log your reading in your reading record at least 3 x per week.	Record all reading in your reading record	
<u>Literacy & handwriting practice</u>	Describe this image of a monster, can you use similes and metaphors to describe the character. Please write a descriptive paragraph to introduce the monster.		22.04.2026



- Complete the number line counting in tenths.



- What decimal numbers are shown by each picture?



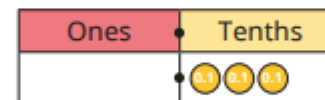
- Draw a picture to show each number.



- Complete the table.

Picture	Words	Fraction	Decimal
	one tenth	$\frac{1}{10}$	0.1
			0.9

- What number is shown on the place value chart?



Use a place value chart to show the numbers.



- Esther puts 10 tenths into the tenths column of a place value chart. What number has she made? What does she need to do?