














Year 4 Homework

Set 12.12.2025

<u>Subject</u>	<u>Task</u>	<u>Feedback</u>	<u>Due in w/c</u>															
<p><u>Spellings</u></p>	<p>To ensure progress is made against the Year 3 and 4 spelling lists we are going to set a list of 76 words each week off the Year 3/4 statutory word list. Please can you work with your child to check they can read and spell the following words:</p> <table border="1" data-bbox="651 488 1070 703"> <tr> <td data-bbox="651 488 884 568">Calamity</td> <td data-bbox="651 488 884 568">Museum Actual</td> <td data-bbox="884 488 1070 568">Tiger</td> </tr> <tr> <td data-bbox="651 568 884 647">Ordinary</td> <td data-bbox="651 568 884 647">Arrive Extreme</td> <td data-bbox="884 568 1070 647">child</td> </tr> <tr> <td data-bbox="651 647 884 719">Unique</td> <td></td> <td data-bbox="884 647 1070 719">computer</td> </tr> <tr> <td data-bbox="651 719 884 791">Particular</td> <td></td> <td></td> </tr> <tr> <td data-bbox="651 791 884 863">Gesture</td> <td></td> <td></td> </tr> </table>	Calamity	Museum Actual	Tiger	Ordinary	Arrive Extreme	child	Unique		computer	Particular			Gesture			<p>Marked in class and written on record cards</p>	<p>17.12.2025</p>
Calamity	Museum Actual	Tiger																
Ordinary	Arrive Extreme	child																
Unique		computer																
Particular																		
Gesture																		
<p><u>Maths</u></p>	<table border="1" data-bbox="517 724 1359 1321"> <tr> <td data-bbox="517 724 949 1007"> <p>Christmas Multiplication and Division</p> <p>8. There are four giant mince pies in a pack. How many mince pies would there be in 296 packs?</p>  </td> <td data-bbox="949 724 1359 1007"> <p>Christmas Multiplication and Division</p> <p>9. Bobby orders a huge illuminated Santa for the front of his house. It costs £1128. He pays one third as a deposit. How much is the deposit?</p>  </td> </tr> <tr> <td data-bbox="517 1007 949 1321"> <p>Christmas Multiplication and Division</p> <p>10. Symmon, Chi and Kee make some snowballs for a snowball fight. They make 195. If they throw equal amounts of the snowballs, how many do they each throw?</p>  </td> <td data-bbox="949 1007 1359 1321"> <p>Christmas Multiplication and Division</p> <p>11. Amelia cannot wait for Christmas! It is four weeks until Christmas Day! How many days is this?</p>  </td> </tr> </table> <p data-bbox="517 1326 1025 1366">My Maths (Login details are in homework books)</p> <p data-bbox="517 1370 1344 1455">Complete sessions on 'TT Rock Stars'. Help your class be the best in the year group. It takes everyone to complete 15minutes a week!</p>	<p>Christmas Multiplication and Division</p> <p>8. There are four giant mince pies in a pack. How many mince pies would there be in 296 packs?</p> 	<p>Christmas Multiplication and Division</p> <p>9. Bobby orders a huge illuminated Santa for the front of his house. It costs £1128. He pays one third as a deposit. How much is the deposit?</p> 	<p>Christmas Multiplication and Division</p> <p>10. Symmon, Chi and Kee make some snowballs for a snowball fight. They make 195. If they throw equal amounts of the snowballs, how many do they each throw?</p> 	<p>Christmas Multiplication and Division</p> <p>11. Amelia cannot wait for Christmas! It is four weeks until Christmas Day! How many days is this?</p> 	<p>Marked in class Time given to practise multiplication tables</p>	<p>17.12.2025</p>											
<p>Christmas Multiplication and Division</p> <p>8. There are four giant mince pies in a pack. How many mince pies would there be in 296 packs?</p> 	<p>Christmas Multiplication and Division</p> <p>9. Bobby orders a huge illuminated Santa for the front of his house. It costs £1128. He pays one third as a deposit. How much is the deposit?</p> 																	
<p>Christmas Multiplication and Division</p> <p>10. Symmon, Chi and Kee make some snowballs for a snowball fight. They make 195. If they throw equal amounts of the snowballs, how many do they each throw?</p> 	<p>Christmas Multiplication and Division</p> <p>11. Amelia cannot wait for Christmas! It is four weeks until Christmas Day! How many days is this?</p> 																	

<p><u>Reading</u></p>	<p>Regular reading at home is essential! Record your reading in your diary All children should have a book suitable for their level of reading. Please log your reading in your reading record at least 3 x per week.</p>	<p>Record all reading in your reading record</p>	
<p><u>Literacy &amp; handwriting practice</u></p>	<p>Draw an image of Mog's Christmas Calamity to use in your story.</p> 		<p>17.12.2025</p>

