











Pond Dipping

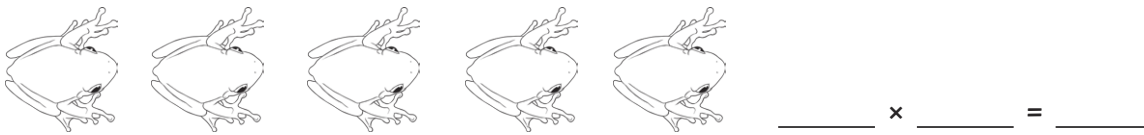
I can count in multiples of four.



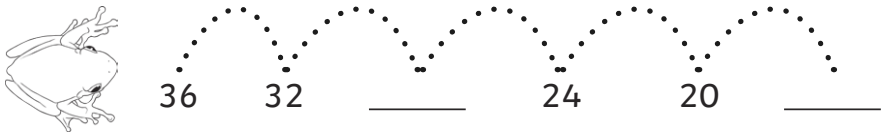
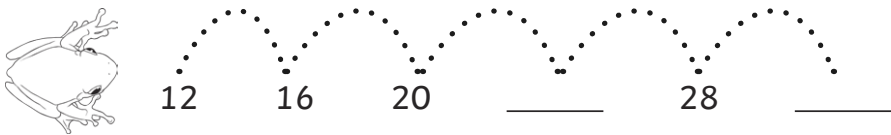
Oh no! The multiples of 4 have been covered up by lily pads. Can you fill in the missing numbers?

1	2	3		5	6	7		9	10
11		13	14	15		17	18	19	
21	22	23		25	26	27		29	30
31		33	34	35		37	38	39	

How many legs are there?



Help Tiddalick jump in multiples of 4.

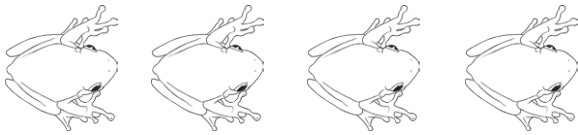


Answers

Oh no! The multiples of 4 have been covered up by lily pads. Can you fill in the missing numbers?

1	2	3	4	5	6	7	8	9	10
11	12	13	14	15	16	17	18	19	20
21	22	23	24	25	26	27	28	29	30
31	32	33	34	35	36	37	38	39	40

How many legs are there?



$$4 \times 4 = 16$$



$$5 \times 4 = 20$$

Help Tiddalick jump in multiples of 4.

